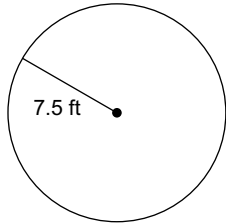


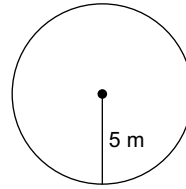
Circumference & Area of a Circle

Find the circumference of each circle. Use 3.14 for the value of π . Round your answer to the nearest tenth.

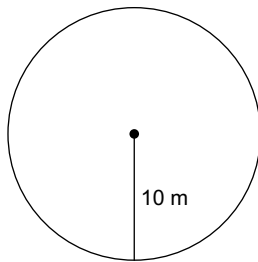
1)



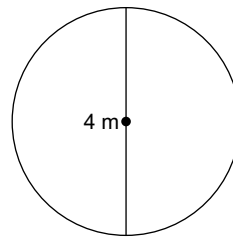
2)



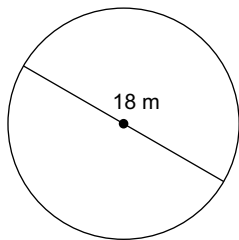
3)



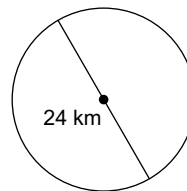
4)



5)

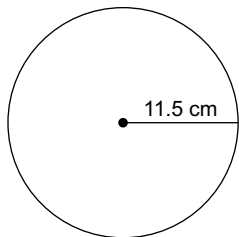


6)

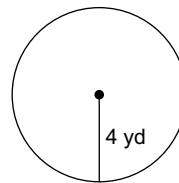


Find the area of each. Use 3.14 for the value of π . Round your answer to the nearest tenth.

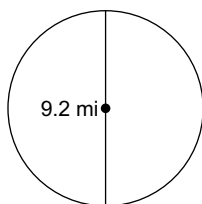
7)



8)



9)



10)

